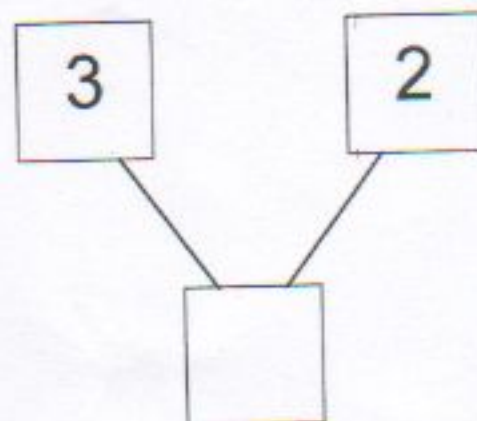
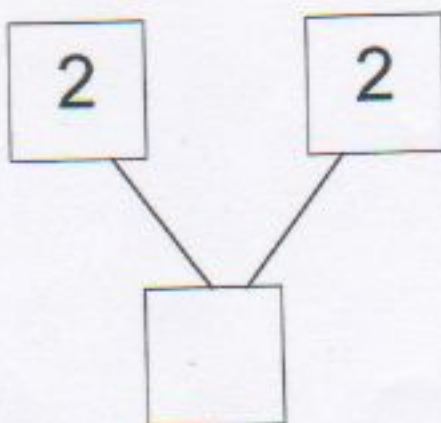
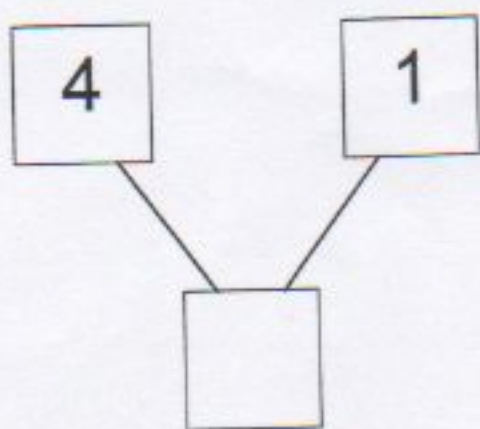
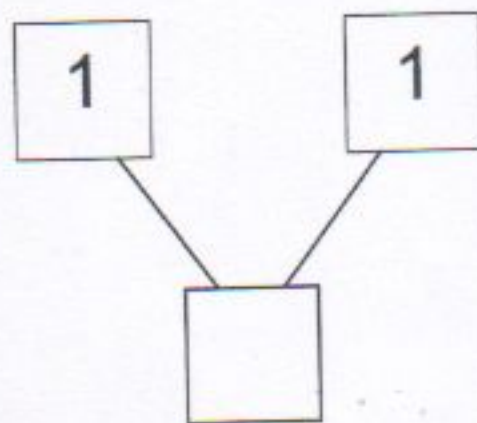
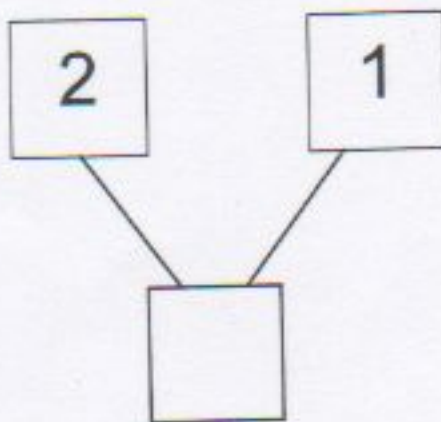
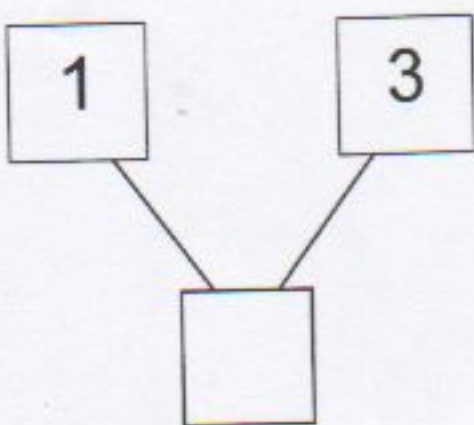


Όνομα: _____

A' Τάξη

Πρόσθεση και ανάλυση των αριθμών μέχρι το 5

Συμπληρώνω τους αριθμούς που λείπουν:



$(3) \text{ και } \bigcirc \longrightarrow (4)$

$(2) \text{ και } \bigcirc \longrightarrow (3)$

$(1) \text{ και } \bigcirc \longrightarrow (3)$

$(4) \text{ και } \bigcirc \longrightarrow (5)$

$(3) \text{ και } \bigcirc \longrightarrow (5)$